



Complete each check below with the information given. The name and address of the person writing the check has been printed on the check. Use this name to sign the check.


Check No. 102:
Date: July 16, 2015
Paid to: Desert Flowers
Amount: \$26.38
For: Aunt Lillian

Check No. 103:
Date: February 13, 2015
Paid to: Sally's Bakery
Amount: \$15.35
For: Valentine treats

Check No. 104:
Date: April 4, 2015
Paid to: Jim's Nursery
Amount: \$18.56
For: plants, seeds

CARRIE SHORT 4444 E. Tyler Ph. 555-1343 Phoenix, AZ 85000	<u>12-1</u> 921	102
Pay to the order of _____ \$ _____		
_____ Dollars		
 Double Diamond Bank 4444 E. Clinton Street Anytown, AZ 85000		
For _____		


JAMES WOODS 1212 N. Platt Ph. 555-1787 Anytown, AZ 85000	<u>12-1</u> 921	103
Pay to the order of _____ \$ _____		
_____ Dollars		
 Double Diamond Bank 4444 E. Clinton Street Anytown, AZ 85000		
For _____		

BRENDA BLOOM 3849 W. Rose Ph. 555-2666 Miami, FL 34000	<u>12-1</u> 921	104
Pay to the order of _____ \$ _____		
_____ Dollars		
 Double Diamond Bank 4444 E. Clinton Street Anytown, AZ 85000		
For _____		


Name _____

Writing Checks


1. Jeff Goldman went to the Alpine Ski Shop to buy ski equipment. His total bill was \$78.94. Complete the check below to show Jeff's purchase. Use today's date.

JEFF GOLDMAN 1456 Silver St. Ph. 555-1189 Pittsburgh, PA 15000	<u>12-1</u> 921	102
Pay to the order of _____	\$ _____	_____ Dollars
 Double Diamond Bank 4444 E. Clinton Street Anytown, AZ 85000		
For _____		

2. Susan Allen bought a new outfit at Bloom's Department Store. She wrote a check for \$43.52 on December 9, 2015, for her purchase. Complete the check below to show Susan's purchase.

SUSAN ALLEN 352 Wood Ln. Ph. 555-3302 Little Rock, AR 51000	<u>12-1</u> 921	103
Pay to the order of _____	\$ _____	_____ Dollars
 Double Diamond Bank 4444 E. Clinton Street Anytown, AZ 85000		
For _____		

3. Allison Green bought treats for her Girl Scout troop. She made her purchases at Granny's Hometown Bakery. She wrote a check for \$12.69 for the treats on February 8, 2015. Complete the check below to show Allison's purchase.

ALLISON GREEN 444 Lake Rd. Ph. 555-1818 Peoria, IL 60000	<u>12-1</u> 921	104
Pay to the order of _____	\$ _____	_____ Dollars
 Double Diamond Bank 4444 E. Clinton Street Anytown, AZ 85000		
For _____		

1. Sara Jane Benson is giving a birthday party for her friend Kathy. At the Good Time Party Shop, she bought a tablecloth and napkins for \$4.50, streamers and party hats for \$2.85, and party favors for \$12.00. Sara Jane wrote a check for the total amount. Add Sara Jane's purchases together and complete the check below for the total amount. Use today's date.

<p>SARA JANE BENSON 1141 E. Thomas Ph. 555-3838 Phoenix, AZ 85000</p>	<p><u>12-1</u> 921</p>	<p>102</p>
<p>_____</p>		
<p>Pay to the order of _____</p>		<p>\$ _____</p>
<p>_____ Dollars</p>		
<p> Double Diamond Bank 4444 E. Clinton Street Anytown, AZ 85000</p>		
<p>For _____</p>		

2. Sara Jane then went to Green's Corner Market. She purchased three cans of fruit punch for \$3.29, two boxes of cake mix for \$2.64, and two packages of frosting mix for \$1.89. Complete the check below to show the total amount of Sara Jane's purchases. Use today's date.


<p>SARA JANE BENSON 1141 E. Thomas Ph. 555-3838 Phoenix, AZ 85000</p>	<p><u>12-1</u> 921</p>	<p>103</p>
<p>_____</p>		
<p>Pay to the order of _____</p>		<p>\$ _____</p>
<p>_____ Dollars</p>		
<p> Double Diamond Bank 4444 E. Clinton Street Anytown, AZ 85000</p>		
<p>For _____</p>		

BONUS: Sara Jane planned to spend \$30.00 on the party. Did she stay within her budget?
 _____ If so, how much does she have left? _____


Name _____

Kelly Jones and Jay French are having a Christmas party together.

1. Kelly went to ABC Hardware for lights and ornaments. She bought three packets of lights for \$7.00, four boxes of ornaments for \$12.36, and an extension cord for \$2.29. Complete the check below to show Kelly's total purchase. The date is December 10, 2015.

KELLY JONES 490 E. Orange Ph. 555-4888 Tempe, AZ 85000	<u>12-1</u> 921	102
Pay to the order of _____	\$ _____	
		Dollars
 Double Diamond Bank 4444 E. Clinton Street Anytown, AZ 85000		
For _____		

2. On the same day, Jay bought a Christmas tree at Carl's Nursery for \$21.50 and a tree stand for \$6.85. He also purchased a can of spray snow for \$2.35. Complete the check below to show Jay's total purchase.

JAY FRENCH 1180 N. Desert Ph. 555-4999 Tempe, AZ 85000	<u>12-1</u> 921	103
Pay to the order of _____	\$ _____	
		Dollars
 Double Diamond Bank 4444 E. Clinton Street Anytown, AZ 85000		
For _____		

BONUS: Kelly and Jay are sharing the cost of the party.

Who has paid more so far? _____

How much more? _____

1. Robert Gold is taking his family on a camping trip. At Four Peaks Sporting Goods, he bought a tent for \$59.95, a camp stove for \$24.95, and a large ice chest for \$32.50. Complete the check below for Mr. Gold's total purchase. Use today's date.

ROBERT & MARY GOLD 8091 S. 10th St. Ph. 555-1004 Phoenix, AZ 85000	<u>12-1</u> 921	103
Pay to the order of _____ \$ _____ _____ Dollars		
Double Diamond Bank 4444 E. Clinton Street Anytown, AZ 85000		
For _____		

2. Mrs. Gold went to Smitty's Grocery to buy some snacks for the trip. She bought two six packs of soda for \$3.29, a bag of potato chips for \$2.19, and a dozen donuts for \$3.69. Complete the check below to show Mrs. Gold's total purchase. Use today's date.

ROBERT & MARY GOLD 8091 S. 10th St. Ph. 555-1004 Phoenix, AZ 85000	<u>12-1</u> 921	104
Pay to the order of _____ \$ _____ _____ Dollars		
Double Diamond Bank 4444 E. Clinton Street Anytown, AZ 85000		
For _____		


BONUS: The Golds have budgeted \$400.00 for their trip. How much money is left after their purchases? _____

If they spend \$50.00 on gas for the car, then how much will be left? _____


Name _____

Writing Checks

1. Carl Lewis needed work done on his car. He went to Hal's Service Station. Carl had his engine tuned up for \$29.95, bought a new battery for \$39.95, and had the oil changed for \$9.95. Complete the check below to show Carl's total payment to the service station. Use today's date.

CARL LEWIS 50 Glen Bay Dr. Ph. 555-1081 Mesa, AZ 85000	<u>12-1</u> 921	102
Pay to the order of _____	\$ _____	_____ Dollars
 Double Diamond Bank 4444 E. Clinton Street Anytown, AZ 85000	For _____	_____

2. Mary Alice Turner took her car to Swifty's Snappy Service. She had her engine tuned up for \$64.00, bought a new battery for \$49.95, and had the oil changed for \$16.95. Complete the check below to show Mary Alice's total purchase. Use today's date.

MARY ALICE TURNER 1482 16th St. Ph. 555-4999 Phoenix, AZ 85000	<u>12-1</u> 921	103
Pay to the order of _____	\$ _____	_____ Dollars
 Double Diamond Bank 4444 E. Clinton Street Anytown, AZ 85000	For _____	_____

BONUS: If you needed work done on your car, would you take it to Hal or Swifty? Why?

1. Michelle Winters went to the Shop-All store to stock up on some household items. She bought two packages of paper plates for \$1.38, two bars of soap for 69¢, two bottles of shampoo for \$2.58, and two packages of trash bags for \$5.00. She had discount coupons worth \$1.05 that were deducted from her total. Complete the check below to show Michelle's total purchase after her coupons were deducted. Use today's date.

MICHELLE WINTERS 52 Sunny Lane Ph. 555-1404 Phoenix, AZ 85000	<u>12-1</u> 921	103
Pay to the order of _____ \$ _____ Dollars		
Double Diamond Bank 4444 E. Clinton Street Anytown, AZ 85000		
For _____		

2. Michelle went to Larry's Drugs to make some additional purchases. She bought one bottle of aspirin for \$3.49, a bottle of vitamins for \$4.79, and a bottle of cough medicine for \$2.49. Complete the check below to show her total purchase. Use today's date.

MICHELLE WINTERS 52 Sunny Lane Ph. 555-1404 Phoenix, AZ 85000	<u>12-1</u> 921	104
Pay to the order of _____ \$ _____ Dollars		
Double Diamond Bank 4444 E. Clinton Street Anytown, AZ 85000		
For _____		

BONUS: The items Michelle purchased at Larry's Drugs were on sale. The regular price of the aspirin was \$4.29; the vitamins, \$5.35; and the cough medicine, \$2.90. How much did she save by buying the items on sale?

1. J.P. Nickel's is having their big summer sale. Billy Moore bought two shirts for \$12.99 each and a new jacket for \$39.00. Complete the check below to show Billy's total purchase. Use today's date.

<p>BILLY MOORE 86 W. 59th Ave. Ph. 555-1208 Mesa, AZ 85000</p>	<p><u>12-1</u> 921</p>	<p>102</p>

Pay to the order of _____		\$ _____
		_____ Dollars
<p>Double Diamond Bank 4444 E. Clinton Street Anytown, AZ 85000</p>		
For _____		

2. Jerry Less went to J.P. Nickel's after the sale was over. He bought the same two shirts for \$19.00 each and a new jacket for \$52.00. Complete the check below to show Jerry's total purchase. Use today's date.

<p>JERRY LESS 1003 Valley Dr. Ph. 555-1442 Phoenix, AZ 85000</p>	<p><u>12-1</u> 921</p>	<p>103</p>

Pay to the order of _____		\$ _____
		_____ Dollars
<p>Double Diamond Bank 4444 E. Clinton Street Anytown, AZ 85000</p>		
For _____		

BONUS: How much did Billy save on the two shirts by buying them on sale?
